



UNIVERSITY OF CAMBRIDGE INTERNATIONAL EXAMINATIONS
International General Certificate of Secondary Education

CANDIDATE
NAME

CENTRE
NUMBER

| | | | | |
|--|--|--|--|--|
| | | | | |
|--|--|--|--|--|

CANDIDATE
NUMBER

| | | | |
|--|--|--|--|
| | | | |
|--|--|--|--|

* 3 9 9 1 3 1 8 4 4 1 *

COMBINED SCIENCE

0653/31

Paper 3 (Extended)

May/June 2012

1 hour 15 minutes

Candidates answer on the Question Paper.

No Additional Materials are required.

READ THESE INSTRUCTIONS FIRST

Write your Centre number, candidate number and name on all the work you hand in.

Write in dark blue or black pen.

You may use a soft pencil for any diagrams, graphs, tables or rough working.

Do not use staples, paper clips, highlighters, glue or correction fluid.

DO NOT WRITE IN ANY BARCODES.

Answer **all** questions.

A copy of the Periodic Table is printed on page 24.

At the end of the examination, fasten all your work securely together.

The number of marks is given in brackets [] at the end of each question or part question.

| For Examiner's Use | |
|--------------------|--|
| 1 | |
| 2 | |
| 3 | |
| 4 | |
| 5 | |
| 6 | |
| 7 | |
| 8 | |
| 9 | |
| Total | |

This document consists of **23** printed pages and **1** blank page.



- 1 Sugar cane is a food crop grown in Australia. It is harvested and then transported on trains to the processing plant.

Fig. 1.1 shows one of the trains carrying sugar cane.




Fig. 1.1

- (a) The mass of the engine and empty trucks is 20 000 kg and the mass of the sugar cane transported is 10 000 kg.

The train travels at a speed of 0.5 m/s.

- (i) Calculate the kinetic energy of the loaded train.

State the formula that you use and show your working.

formula used

working

..... [2]

- (ii) To travel at this speed, a driving force of 1 000 000 N is needed.

Calculate the work done by the engine of the train when it travels 1 km.

State the formula that you use and show your working.

formula used

working

..... [2]

(iii) It takes the train 5 minutes to travel 1 km. Calculate the power output of the engine.

State the formula that you use and show your working.

formula used

working

..... [2]

(b) The track for the train is composed of short lengths of steel rail with small gaps left between them as shown in Fig. 1.2.

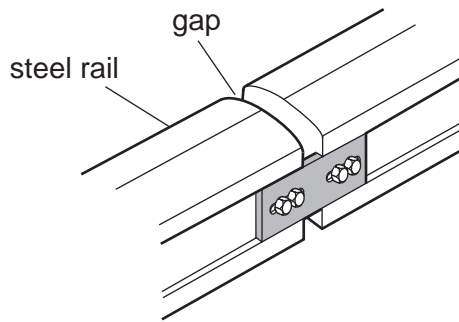


Fig. 1.2

Suggest a reason for leaving these small gaps.

.....

.....

..... [2]

- 2 An element is a substance that is made of atoms which have the same proton number. Most atoms contain protons, neutrons and electrons.

(a) Name the element whose atoms do **not** usually contain any neutrons.

..... [1]

(b) The electronic structures (configurations) of atoms of three elements, **P**, **Q** and **R** are shown below.

P 2,8,1

Q 2,8

R 2,7

(i) Use the electronic structures to state and explain the group numbers in the Periodic Table that contain elements **P**, **Q** and **R**.

P Group

Q Group

R Group

explanation

..... [2]

(ii) State and explain which of the elements, **P**, **Q** or **R**, is the least reactive.

element

explanation

..... [1]

(iii) State and explain which **one** of the elements, **P**, **Q** or **R**, is a good conductor of electricity.

element

explanation

..... [1]

- (c) Most metallic elements occur combined with non-metals in the Earth's crust. Over thousands of years, humans have carried out chemical reactions to extract metals from their ores.

Fig. 2.1 shows a cross-section through a shaft furnace which was a simple reaction vessel used by ancient civilisations to extract iron.

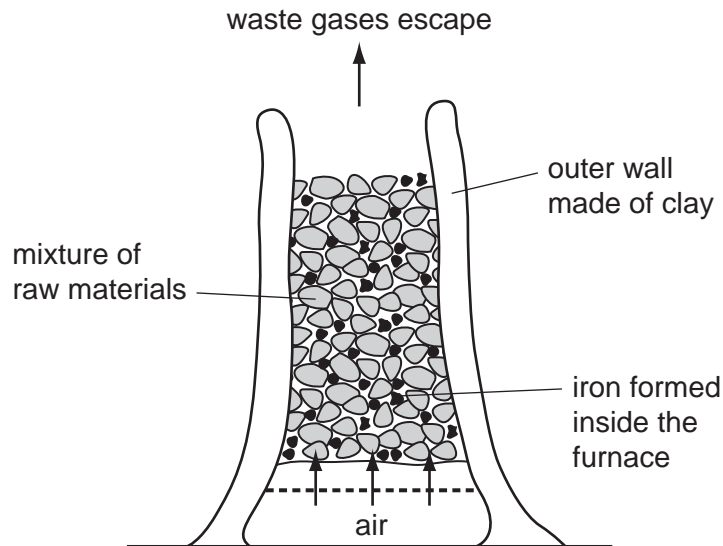


Fig. 2.1

In this shaft furnace the mixture of raw materials consisted of charcoal and iron ore. Charcoal contains mainly carbon, and iron ore contains iron oxide.

Nowadays iron is extracted from iron ore in a blast furnace.

- (i) Name another raw material, which is added to a modern blast furnace but which is **not** present in the shaft furnace in Fig. 2.1.

Explain briefly why this material is used.

name of material

reason this material is used

..... [2]

- (ii) Iron is extracted from iron ore when a gaseous oxide of carbon reacts with iron oxide.

Write a **word** chemical equation for this reaction.

..... [2]

(d) (i) Suggest, in terms of relative reactivity, why a mixture of aluminium oxide and carbon does **not** produce any metallic aluminium in a blast furnace.

.....
.....
..... [2]

(ii) Name the process that is used to extract aluminium from aluminium oxide.

..... [1]

3 Marmots are herbivorous mammals. Fig. 3.1 shows a marmot.




Fig. 3.1

A study has been carried out into the marmots living in Colorado, USA.

The winters in this part of Colorado are so cold that the marmots would not be able to find enough food to eat. Instead, they allow their body temperature to drop much lower than normal and stay inactive for many months. This is called hibernation. They do not eat while they are hibernating. They emerge from hibernation in spring.

(a) Before they hibernate, marmots build up large fat stores beneath their skin.

Suggest and explain what marmots must do in order to build up large fat stores in their bodies.

.....

.....

..... [2]

(b) Fig. 3.2 shows the percentage of marmots with different body masses that survive through the winter.

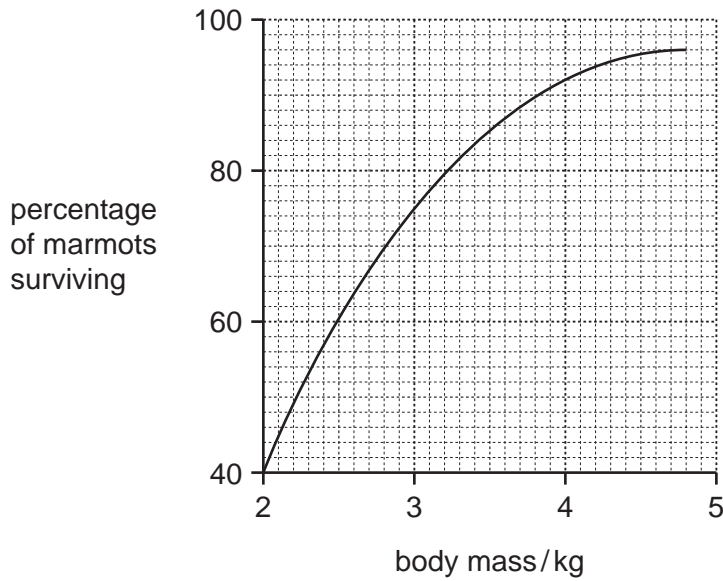


Fig. 3.2

(i) Describe the relationship between a marmot's body mass and its chance of surviving the winter.

.....

.....

..... [2]

(ii) Suggest how a layer of fat beneath the skin can reduce heat transfer from a hibernating marmot's body to its surroundings.

.....

..... [1]

(c) In the last twenty years, spring has been arriving earlier in the year in Colorado. This is a result of global warming.

Explain how human activities, other than the combustion of fossil fuels, are thought to contribute to global warming.

.....

.....

.....

.....

..... [3]

(d) Fig. 3.3 shows the mean body mass of the marmots on the first day of August (summer) between 1976 and 2006.

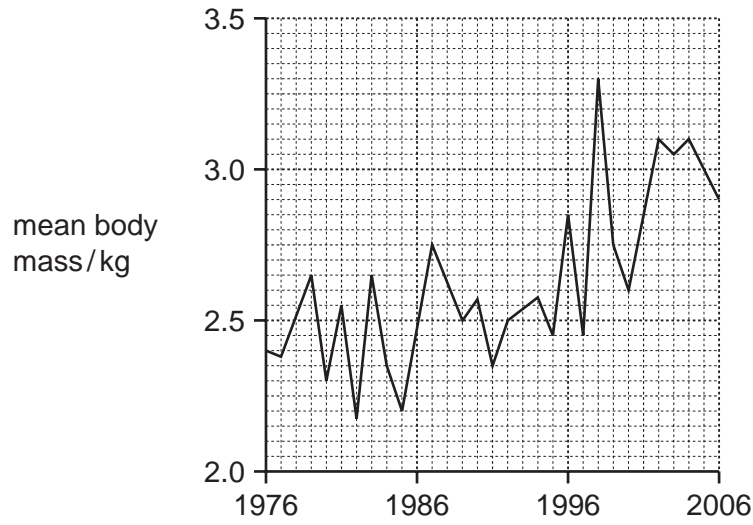


Fig. 3.3

(i) Describe the general trend shown in Fig. 3.3.

.....
..... [1]

(ii) Suggest how the earlier arrival of spring could be responsible for this trend.

.....
..... [1]

- 4 Fig. 4.1 shows the apparatus a student used to investigate the effect of changing the concentration on the rate of reaction between excess dilute hydrochloric acid and magnesium. At the start of the experiment the measuring cylinder contained no gas and was full of water.

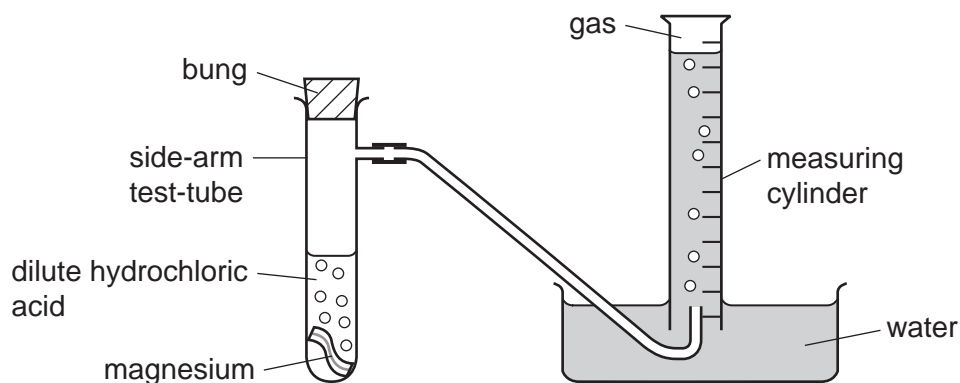


Fig. 4.1

To carry out his investigation the student used the following method.

- He dropped the magnesium into the dilute acid.
- He immediately placed the bung into the side-arm test-tube and started a stopclock.
- He measured the volume of gas in the measuring cylinder every half minute, for eight minutes.

He carried out two experiments, **A** and **B**, in which the only variable that he changed was the concentration of the hydrochloric acid.

- (a) State **two** other variables that the student needed to keep the same in experiments **A** and **B**.

1

2 [1]

(b) Fig. 4.2 shows the results the student obtained for experiments **A** and **B**.

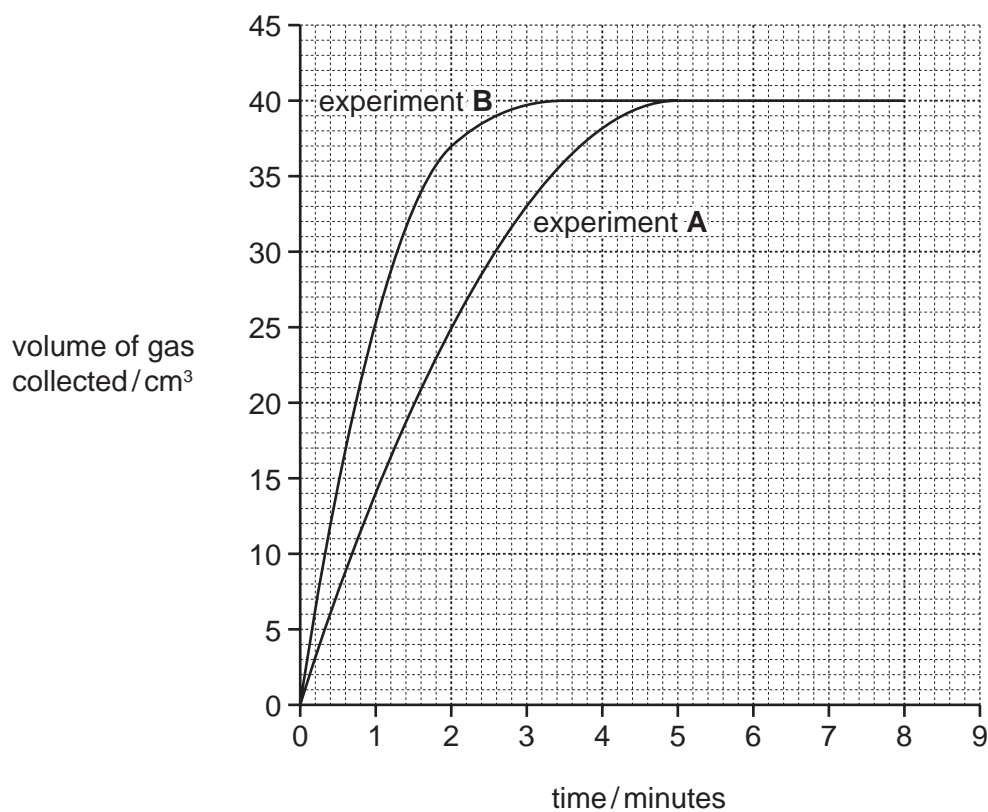


Fig. 4.2

- (i) In which experiment, **A** or **B**, did the student use hydrochloric acid which had the higher concentration?

Explain your answer.

experiment

explanation

.....

..... [1]

- (ii) The student was told that he could calculate the average rate of reaction using the following equation:

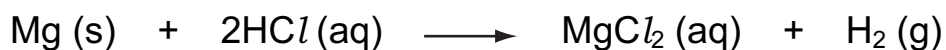
$$\text{average rate of reaction} = \frac{\text{maximum volume of gas collected}}{\text{minimum time taken to collect maximum volume}}$$

Use the information in Fig. 4.2 to calculate the average rate of reaction for experiment **A**.

Show your working and state the units.

..... [3]

- (c) The balanced symbolic equation for the reaction between hydrochloric acid and magnesium is shown below.



- (i) What is meant by the state symbol (aq) in this equation?

..... [1]

- (ii) Suggest why the reaction in both experiments **A** and **B** above produced the same volume of gas.

.....

.....

..... [2]

Please turn over for Question 5.

5 (a) A bat produces a sound wave with a frequency of 212 kHz and a wavelength of 0.003 m.

(i) This sound is outside the audible frequency range for humans.

State the approximate audible frequency range for humans.

..... [1]

(ii) State the meaning of the terms *frequency* and *wavelength*, when describing a wave. You may use a diagram if it helps your explanation.

frequency

.....
.....
.....

wavelength

.....
.....
.....

[2]

(iii) Calculate the speed of the sound wave produced by the bat.

State the formula that you use and show your working.

formula used

working

..... [2]

(iv) Sound travels through the air by a series of compressions and rarefactions.

Describe what this means in terms of air particles.

.....
.....
..... [2]

(b) A girl shouts and waves to another girl in the school playground as shown in Fig. 5.1.



Fig. 5.1

The sound energy and the light energy both travel from one girl to the other by wave motion.

(i) State whether sound waves and light waves are transverse or longitudinal.

Sound waves are

Light waves are [2]

(ii) The girls could have communicated with each other using their mobile phones (cell phones).

Name the type of electromagnetic wave used to communicate between mobile phones.

..... [1]

6 Fig. 6.1 shows part of a section across a root from a radish plant, photographed through a microscope.

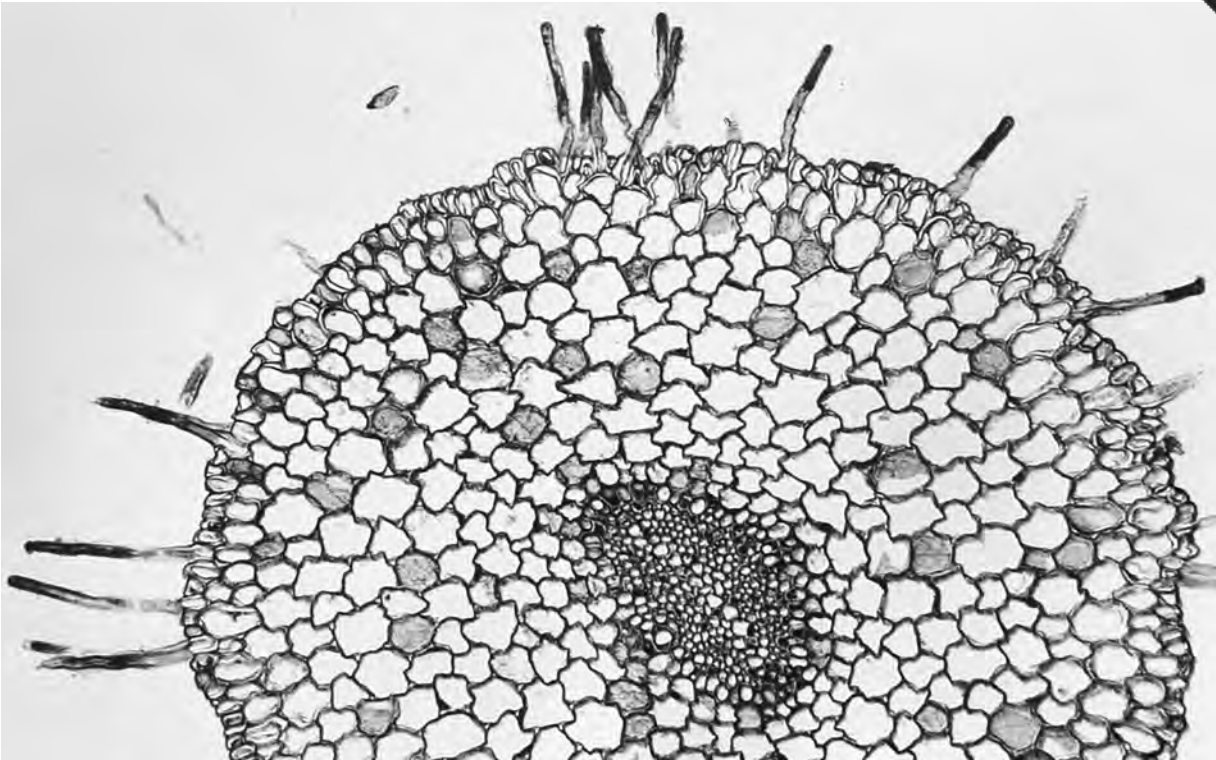


Fig. 6.1

(a) On Fig. 6.1, use a label line to label a root hair cell. [1]

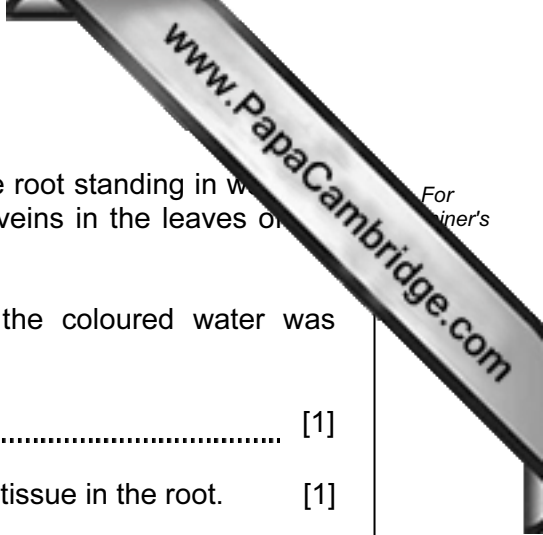
(b) Root hair cells absorb water from the soil.

(i) State **one** other function of root hair cells.

..... [1]

(ii) Explain how root hair cells are adapted for their functions.

.....
.....
..... [2]



(c) A complete radish plant was placed with the lower part of the root standing in water. A soluble red dye was added to the water. After a while, the veins in the leaves of the radish plant became red.

(i) Name the tissue in the radish plant through which the coloured water was transported from the roots to the leaves.

..... [1]

(ii) On Fig. 6.1, write the letter **A** to show the position of this tissue in the root. [1]

(iii) Water was drawn up through the radish plant because water vapour was constantly escaping from its leaves. A plastic bag was placed over the leaves of the radish plant, and the water vapour formed colourless droplets of liquid water on the bag as it condensed.

Explain why these water droplets were not red.

.....
.....
..... [2]

- 7 (a) (i) Draw a circuit diagram that a student could use to investigate how the change in potential difference across a lamp affects the current flowing through it.

[3]

- (ii) During his investigations, the student measured the voltage across the lamp as 3.0 V and the current passing through the lamp as 0.3 A.

Calculate the resistance of the lamp.

State the formula that you use and show your working.

formula used

working

..... [2]

(b) Table 7.1 shows some information about six pieces of wire, all at room temperature (20°C).

Table 7.1

| wire | metal composition | length / cm | cross-sectional area / mm ² |
|------|-------------------|-------------|--|
| A | copper | 10 | 0.5 |
| B | nichrome | 10 | 0.5 |
| C | copper | 20 | 0.5 |
| D | nichrome | 20 | 0.5 |
| E | copper | 10 | 1.0 |
| F | copper | 20 | 1.0 |

(i) Which wire, **B** or **D**, will have the greater resistance?

Explain your answer.

wire

..... [1]

(ii) Which wire, **A** or **E**, will have the greater resistance?

Explain your answer.

wire

..... [1]

(c) A plastic rod is rubbed with a cloth.

The rod becomes charged.

There are two types of electric charge.

(i) State the names of these charges.

1

2 [1]

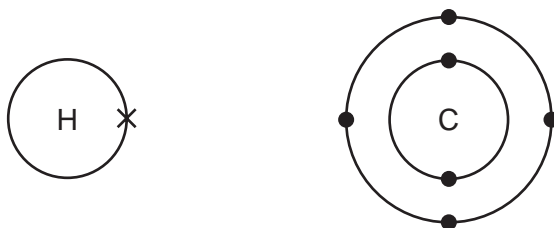
(ii) Charged particles are transferred between the rod and cloth.

Name the charged particles transferred. [1]

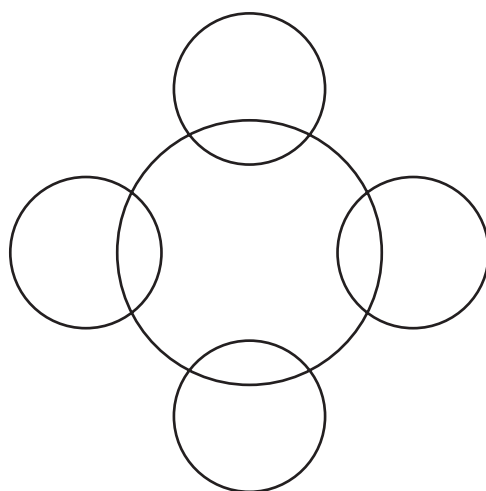
8 Hydrocarbons are compounds that contain carbon and hydrogen only.

The hydrocarbon that contains the simplest molecules is methane.

(a) (i) The diagrams below show an atom of carbon and an atom of hydrogen.



Complete the covalent bonding diagram of a molecule of methane to show how the bonding electrons are arranged.



[2]

(ii) Complete the molecular structure diagrams below to show molecules of the hydrocarbons ethane and ethene.

| | |
|--------|--|
| ethane | H—C |
| ethene | $\begin{array}{c} \text{H} \\ \\ \text{C} \end{array}$ |

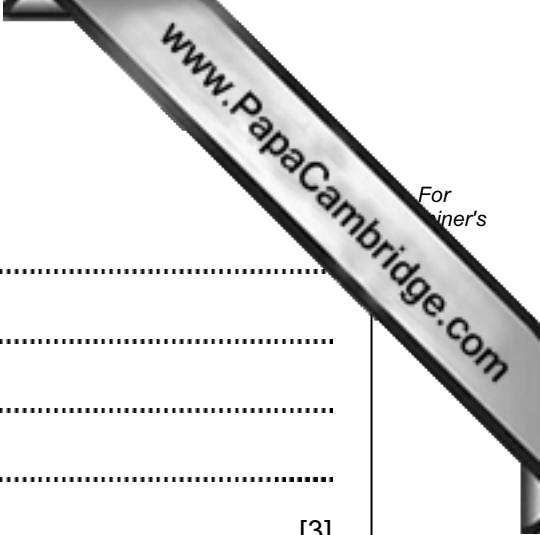
[2]

(b) In many countries, ethanol, C_2H_6O , is added to hydrocarbon fuels such as gasoline. For
inert's

The products of complete combustion of ethanol are the same as those of hydrocarbons such as methane.

Suggest the **word** chemical equation for the complete combustion of ethanol.

..... [2]



9 (a) Define the term *hormone*.

.....
.....
.....
.....
..... [3]

(b) Adrenaline is sometimes called the 'fright, flight or fight' hormone. It is produced when a person is frightened.

One effect of adrenaline is to increase a person's pulse rate.

Explain how this could help a person to run away from the thing that has frightened them.

.....
.....
.....
..... [2]

(c) Plants also produce hormones. One plant hormone is auxin. Auxin helps plant shoots to respond to light coming from only one direction.

(i) State the correct term for the growth response of a plant to light coming from only one direction.

..... [1]



For
iner's

- (ii) Explain how auxin helps a plant shoot respond to light coming from one direction. You may use a diagram as part of your explanation.

.....

.....

.....

.....

..... [3]

Copyright Acknowledgements:

Question 6 Photograph © B23WP8 cross section of a radish root; Biodisc/Visuals Unlimited/Alamy.

Permission to reproduce items where third-party owned material protected by copyright is included has been sought and cleared where possible. Every reasonable effort has been made by the publisher (UCLES) to trace copyright holders, but if any items requiring clearance have unwittingly been included, the publisher will be pleased to make amends at the earliest possible opportunity.

University of Cambridge International Examinations is part of the Cambridge Assessment Group. Cambridge Assessment is the brand name of University of

DATA SHEET
The Periodic Table of the Elements

| | | Group | | | | | | | | | | | | | | | | | | | | | | | | | | | | | | | | | | | | | | | | | | | | | | | | | | | | | | | | | | | | | | | | | | | | | | | | | | | | | | | | | | | | | | | | | | | | | | | | | | | | | | | | | | | | | | | | | | | | | | | | | | | | | | | | | | | | | | | | | | | | | | | | | | | | | | | | | | | | | | | | | | | | | | | | | | | | | | | | | | | | | | | | | | | | | | | | | | | | | | | | | | | | | | | | | | | | | | | | | | | | | | | | | | | | | | | | | | | | | | | | | | | | | | | | | | | | | | | | | | | | | | | | | | | | | | | | | | | | | | | | | | | | | | | | | | | | | | | | | | | | | | | | | | | | | | | | | | | | | | | | | | | | | | | | | | | | | | | | | | | | | | | | | | | | | | | | | | | | | | | | | | | | | | | | | | | | | | | | | | | | | | | | | | | | | | | | | | | | | | | | | | | | | | | | | | | | | | | | | | | | | | | | | | | | | | | | | | | | | | | | | | | | | | | | | | | | | | | | | | | | | | | |
|--------------------------------|----------------------------------|--------------------------------|------------------------------|-------------------------------|------------------------------------|----------------------------------|------------------------------------|--------------------------------|-----------------------------------|--------------------------------|---------------------------------|-------------------------------|---------------------------------|------------------------------------|------------------------------------|----------------------------------|------------------------------------|--------------------------------|-----------------------------------|--------------------------------|-----------------------------------|----------------------------------|-----------------------------------|-----------------------------------|----------------------------------|-----------------------------------|------------------------------------|-------------------------------|---------------------------------|---------------------------------|---------------------------------|-------------------------------|----------------------------------|------------------------------------|----------------------------------|-----------------------------------|----------------------------------|----------------------------------|-----------------------------------|------------------------------------|---------------------------------|------------------------------------|----------------------------------|-------------------------------------|-------------------------------------|------------------------------------|----------------------------------|------------------------------------|---------------------------------|----------------------------------|---------------------------------|------------------------------|-----------------------------------|------------------------------------|--------------------------------|--------------------------------|----------------------------------|---------------------------------|------------------------------------|----------------------------------|-----------------------------------|----------------------------------|----------------------------------|---------------------------------|----------------------------------|-----------------------------------|-------------------------------|----------------------------------|-----------------------------------|-------------------------------|----------------------------------|-----------------------------------|-----------------------------------|--------------------------------|-----------------------------------|---------------------------------|-----------------------------------|----------------------------------|---------------------------------------|---------------------------------|------------------------------------|------------------------------------|------------------------------------|---------------------------------|------------------------------------|--------------------------------------|--------------------------------------|-----------------------------------|---------------------------------------|------------------------------------|--------------------------------------|------------------------------------|-------------------------------------|------------------------------------|-------------------------------------|----------------------------------|--|-------------------------------------|--------------------------------------|------------------------------------|------------------------------------|--------------------------------------|-----------------------------------|--------------------------------------|-----------------------------------|----------------------------------|-----------------------------------|-------------------------------------|------------------------------------|-------------------------------------|----------------------------------|--|-------------------------------------|--------------------------------------|------------------------------------|------------------------------------|--------------------------------------|-----------------------------------|--------------------------------------|-----------------------------------|----------------------------------|-----------------------------------|-------------------------------------|------------------------------------|-------------------------------------|----------------------------------|--|-------------------------------------|--------------------------------------|------------------------------------|------------------------------------|--------------------------------------|-----------------------------------|--------------------------------------|-----------------------------------|----------------------------------|-----------------------------------|-------------------------------------|------------------------------------|-------------------------------------|----------------------------------|--|-------------------------------------|--------------------------------------|------------------------------------|------------------------------------|--------------------------------------|-----------------------------------|--------------------------------------|-----------------------------------|----------------------------------|-----------------------------------|-------------------------------------|------------------------------------|-------------------------------------|----------------------------------|--|-------------------------------------|--------------------------------------|------------------------------------|------------------------------------|--------------------------------------|-----------------------------------|--------------------------------------|-----------------------------------|----------------------------------|-----------------------------------|-------------------------------------|------------------------------------|-------------------------------------|----------------------------------|--|-------------------------------------|--------------------------------------|------------------------------------|------------------------------------|--------------------------------------|-----------------------------------|--------------------------------------|-----------------------------------|----------------------------------|-----------------------------------|-------------------------------------|------------------------------------|-------------------------------------|----------------------------------|--|-------------------------------------|--------------------------------------|------------------------------------|------------------------------------|--------------------------------------|-----------------------------------|--------------------------------------|-----------------------------------|----------------------------------|-----------------------------------|-------------------------------------|------------------------------------|-------------------------------------|----------------------------------|--|-------------------------------------|--------------------------------------|------------------------------------|------------------------------------|--------------------------------------|-----------------------------------|--------------------------------------|-----------------------------------|----------------------------------|-----------------------------------|-------------------------------------|------------------------------------|-------------------------------------|----------------------------------|--|-------------------------------------|--------------------------------------|------------------------------------|------------------------------------|--------------------------------------|-----------------------------------|--------------------------------------|-----------------------------------|----------------------------------|-----------------------------------|-------------------------------------|------------------------------------|-------------------------------------|----------------------------------|--|-------------------------------------|--------------------------------------|------------------------------------|------------------------------------|--------------------------------------|-----------------------------------|--------------------------------------|-----------------------------------|----------------------------------|-----------------------------------|-------------------------------------|------------------------------------|-------------------------------------|----------------------------------|--|-------------------------------------|--------------------------------------|------------------------------------|------------------------------------|--------------------------------------|-----------------------------------|--------------------------------------|-----------------------------------|----------------------------------|-----------------------------------|-------------------------------------|------------------------------------|-------------------------------------|----------------------------------|--|-------------------------------------|--------------------------------------|------------------------------------|------------------------------------|--------------------------------------|-----------------------------------|--------------------------------------|-----------------------------------|----------------------------------|-----------------------------------|-------------------------------------|------------------------------------|-------------------------------------|----------------------------------|--|-------------------------------------|--------------------------------------|------------------------------------|------------------------------------|--------------------------------------|-----------------------------------|--------------------------------------|-----------------------------------|----------------------------------|-----------------------------------|-------------------------------------|------------------------------------|-------------------------------------|----------------------------------|--|-------------------------------------|--------------------------------------|------------------------------------|------------------------------------|--------------------------------------|-----------------------------------|--------------------------------------|-----------------------------------|----------------------------------|-----------------------------------|-------------------------------------|------------------------------------|-------------------------------------|----------------------------------|--|-------------------------------------|--------------------------------------|------------------------------------|------------------------------------|--------------------------------------|-----------------------------------|--------------------------------------|-----------------------------------|----------------------------------|-----------------------------------|-------------------------------------|------------------------------------|-------------------------------------|----------------------------------|--|-------------------------------------|--------------------------------------|------------------------------------|------------------------------------|--------------------------------------|-----------------------------------|--------------------------------------|-----------------------------------|----------------------------------|-----------------------------------|-------------------------------------|------------------------------------|-------------------------------------|----------------------------------|--|-------------------------------------|--------------------------------------|------------------------------------|------------------------------------|--------------------------------------|-----------------------------------|--------------------------------------|-----------------------------------|----------------------------------|-----------------------------------|-------------------------------------|------------------------------------|-------------------------------------|----------------------------------|--|-------------------------------------|--------------------------------------|------------------------------------|------------------------------------|--------------------------------------|-----------------------------------|--------------------------------------|-----------------------------------|----------------------------------|-----------------------------------|-------------------------------------|------------------------------------|-------------------------------------|----------------------------------|--|-------------------------------------|--------------------------------------|------------------------------------|------------------------------------|--------------------------------------|-----------------------------------|--------------------------------------|-----------------------------------|----------------------------------|-----------------------------------|-------------------------------------|------------------------------------|-------------------------------------|----------------------------------|--|-------------------------------------|--------------------------------------|------------------------------------|------------------------------------|--------------------------------------|-----------------------------------|--------------------------------------|-----------------------------------|----------------------------------|-----------------------------------|-------------------------------------|------------------------------------|-------------------------------------|----------------------------------|--|-------------------------------------|--------------------------------------|------------------------------------|------------------------------------|--------------------------------------|-----------------------------------|--------------------------------------|-----------------------------------|----------------------------------|-----------------------------------|-------------------------------------|------------------------------------|-------------------------------------|----------------------------------|--|-------------------------------------|--------------------------------------|------------------------------------|------------------------------------|--------------------------------------|-----------------------------------|--------------------------------------|-----------------------------------|----------------------------------|-----------------------------------|-------------------------------------|------------------------------------|-------------------------------------|----------------------------------|--|-------------------------------------|--------------------------------------|------------------------------------|------------------------------------|--------------------------------------|-----------------------------------|--------------------------------------|-----------------------------------|----------------------------------|-----------------------------------|-------------------------------------|------------------------------------|-------------------------------------|----------------------------------|--|-------------------------------------|--------------------------------------|------------------------------------|------------------------------------|--------------------------------------|-----------------------------------|--------------------------------------|-----------------------------------|----------------------------------|-----------------------------------|-------------------------------------|------------------------------------|-------------------------------------|----------------------------------|--|-------------------------------------|--------------------------------------|------------------------------------|------------------------------------|--------------------------------------|-----------------------------------|--------------------------------------|-------------------------|
| I | II | III | IV | V | VI | VII | 0 | | | | | | | | | | | | | | | | | | | | | | | | | | | | | | | | | | | | | | | | | | | | | | | | | | | | | | | | | | | | | | | | | | | | | | | | | | | | | | | | | | | | | | | | | | | | | | | | | | | | | | | | | | | | | | | | | | | | | | | | | | | | | | | | | | | | | | | | | | | | | | | | | | | | | | | | | | | | | | | | | | | | | | | | | | | | | | | | | | | | | | | | | | | | | | | | | | | | | | | | | | | | | | | | | | | | | | | | | | | | | | | | | | | | | | | | | | | | | | | | | | | | | | | | | | | | | | | | | | | | | | | | | | | | | | | | | | | | | | | | | | | | | | | | | | | | | | | | | | | | | | | | | | | | | | | | | | | | | | | | | | | | | | | | | | | | | | | | | | | | | | | | | | | | | | | | | | | | | | | | | | | | | | | | | | | | | | | | | | | | | | | | | | | | | | | | | | | | | | | | | | | | | | | | | | | | | | | | | | | | | | | | | | | | | | | | | | | | | | | | | | | | | | | | | | | | | | | | | | |
| 7 Li Lithium 3 | 9 Be Beryllium 4 | 1 H Hydrogen 1 | 11 B Boron 5 | 12 C Carbon 6 | 13 Al Aluminium 13 | 14 Si Silicon 14 | 15 P Phosphorus 15 | 16 S Sulfur 16 | 17 Cl Chlorine 17 | 18 Ar Argon 18 | 19 F Fluorine 9 | 20 Ne Neon 10 | 21 Na Sodium 11 | 22 Mg Magnesium 12 | 23 Al Aluminium 13 | 24 Si Silicon 14 | 25 P Phosphorus 15 | 26 S Sulfur 16 | 27 Cl Chlorine 17 | 28 Ar Argon 18 | 29 K Potassium 19 | 30 Ca Calcium 20 | 31 Sc Scandium 21 | 32 Ti Titanium 22 | 33 V Vanadium 23 | 34 Cr Chromium 24 | 35 Mn Manganese 25 | 36 Fe Iron 26 | 37 Co Cobalt 27 | 38 Ni Nickel 28 | 39 Cu Copper 29 | 40 Zn Zinc 30 | 41 Ga Gallium 31 | 42 Ge Germanium 32 | 43 As Arsenic 33 | 44 Se Selenium 34 | 45 Br Bromine 35 | 46 Kr Krypton 36 | 47 Rb Rubidium 37 | 48 Sr Strontium 38 | 49 Y Yttrium 39 | 50 Zr Zirconium 40 | 51 Nb Niobium 41 | 52 Mo Molybdenum 42 | 53 Tc Technetium 43 | 54 Ru Ruthenium 44 | 55 Rh Rhodium 45 | 56 Pd Palladium 46 | 57 Ag Silver 47 | 58 Cd Cadmium 48 | 59 In Indium 49 | 60 Sn Tin 50 | 61 Sb Antimony 51 | 62 Te Tellurium 52 | 63 I Iodine 53 | 64 Xe Xenon 54 | 65 Cs Caesium 55 | 66 Ba Barium 56 | 67 La Lanthanum 57 | 68 Hf Hafnium 72 | 69 Ta Tantalum 73 | 70 W Tungsten 74 | 71 Re Rhenium 75 | 72 Os Osmium 76 | 73 Ir Iridium 77 | 74 Pt Platinum 78 | 75 Au Gold 79 | 76 Hg Mercury 80 | 77 Tl Thallium 81 | 78 Pb Lead 82 | 79 Bi Bismuth 83 | 80 Po Polonium 84 | 81 At Astatine 85 | 82 Rn Radon 86 | 83 Fr Francium 87 | 84 Ra Radium 88 | 85 Ac Actinium 89 | 86 Th Thorium 90 | 87 Pa Protactinium 91 | 88 U Uranium 92 | 89 Np Neptunium 93 | 90 Pu Plutonium 94 | 91 Am Americium 95 | 92 Cm Curium 96 | 93 Bk Berkelium 97 | 94 Cf Californium 98 | 95 Es Einsteinium 99 | 96 Fm Fermium 100 | 97 Md Mendelevium 101 | 98 No Nobelium 102 | 99 Lr Lawrencium 103 | 100 Lu Lutetium 71 | 101 Yb Ytterbium 70 | 102 Lu Lutetium 71 | 103 La Lanthanum 57 | 104 Ce Cerium 58 | 105 Pr Praseodymium 59 | 106 Nd Neodymium 60 | 107 Pm Promethium 61 | 108 Sm Samarium 62 | 109 Eu Europium 63 | 110 Gd Gadolinium 64 | 111 Tb Terbium 65 | 112 Dy Dysprosium 66 | 113 Ho Holmium 67 | 114 Er Erbium 68 | 115 Tm Thulium 69 | 116 Yb Ytterbium 70 | 117 Lu Lutetium 71 | 118 La Lanthanum 57 | 119 Ce Cerium 58 | 120 Pr Praseodymium 59 | 121 Nd Neodymium 60 | 122 Pm Promethium 61 | 123 Sm Samarium 62 | 124 Eu Europium 63 | 125 Gd Gadolinium 64 | 126 Tb Terbium 65 | 127 Dy Dysprosium 66 | 128 Ho Holmium 67 | 129 Er Erbium 68 | 130 Tm Thulium 69 | 131 Yb Ytterbium 70 | 132 Lu Lutetium 71 | 133 La Lanthanum 57 | 134 Ce Cerium 58 | 135 Pr Praseodymium 59 | 136 Nd Neodymium 60 | 137 Pm Promethium 61 | 138 Sm Samarium 62 | 139 Eu Europium 63 | 140 Gd Gadolinium 64 | 141 Tb Terbium 65 | 142 Dy Dysprosium 66 | 143 Ho Holmium 67 | 144 Er Erbium 68 | 145 Tm Thulium 69 | 146 Yb Ytterbium 70 | 147 Lu Lutetium 71 | 148 La Lanthanum 57 | 149 Ce Cerium 58 | 150 Pr Praseodymium 59 | 151 Nd Neodymium 60 | 152 Pm Promethium 61 | 153 Sm Samarium 62 | 154 Eu Europium 63 | 155 Gd Gadolinium 64 | 156 Tb Terbium 65 | 157 Dy Dysprosium 66 | 158 Ho Holmium 67 | 159 Er Erbium 68 | 160 Tm Thulium 69 | 161 Yb Ytterbium 70 | 162 Lu Lutetium 71 | 163 La Lanthanum 57 | 164 Ce Cerium 58 | 165 Pr Praseodymium 59 | 166 Nd Neodymium 60 | 167 Pm Promethium 61 | 168 Sm Samarium 62 | 169 Eu Europium 63 | 170 Gd Gadolinium 64 | 171 Tb Terbium 65 | 172 Dy Dysprosium 66 | 173 Ho Holmium 67 | 174 Er Erbium 68 | 175 Tm Thulium 69 | 176 Yb Ytterbium 70 | 177 Lu Lutetium 71 | 178 La Lanthanum 57 | 179 Ce Cerium 58 | 180 Pr Praseodymium 59 | 181 Nd Neodymium 60 | 182 Pm Promethium 61 | 183 Sm Samarium 62 | 184 Eu Europium 63 | 185 Gd Gadolinium 64 | 186 Tb Terbium 65 | 187 Dy Dysprosium 66 | 188 Ho Holmium 67 | 189 Er Erbium 68 | 190 Tm Thulium 69 | 191 Yb Ytterbium 70 | 192 Lu Lutetium 71 | 193 La Lanthanum 57 | 194 Ce Cerium 58 | 195 Pr Praseodymium 59 | 196 Nd Neodymium 60 | 197 Pm Promethium 61 | 198 Sm Samarium 62 | 199 Eu Europium 63 | 200 Gd Gadolinium 64 | 201 Tb Terbium 65 | 202 Dy Dysprosium 66 | 203 Ho Holmium 67 | 204 Er Erbium 68 | 205 Tm Thulium 69 | 206 Yb Ytterbium 70 | 207 Lu Lutetium 71 | 208 La Lanthanum 57 | 209 Ce Cerium 58 | 210 Pr Praseodymium 59 | 211 Nd Neodymium 60 | 212 Pm Promethium 61 | 213 Sm Samarium 62 | 214 Eu Europium 63 | 215 Gd Gadolinium 64 | 216 Tb Terbium 65 | 217 Dy Dysprosium 66 | 218 Ho Holmium 67 | 219 Er Erbium 68 | 220 Tm Thulium 69 | 221 Yb Ytterbium 70 | 222 Lu Lutetium 71 | 223 La Lanthanum 57 | 224 Ce Cerium 58 | 225 Pr Praseodymium 59 | 226 Nd Neodymium 60 | 227 Pm Promethium 61 | 228 Sm Samarium 62 | 229 Eu Europium 63 | 230 Gd Gadolinium 64 | 231 Tb Terbium 65 | 232 Dy Dysprosium 66 | 233 Ho Holmium 67 | 234 Er Erbium 68 | 235 Tm Thulium 69 | 236 Yb Ytterbium 70 | 237 Lu Lutetium 71 | 238 La Lanthanum 57 | 239 Ce Cerium 58 | 240 Pr Praseodymium 59 | 241 Nd Neodymium 60 | 242 Pm Promethium 61 | 243 Sm Samarium 62 | 244 Eu Europium 63 | 245 Gd Gadolinium 64 | 246 Tb Terbium 65 | 247 Dy Dysprosium 66 | 248 Ho Holmium 67 | 249 Er Erbium 68 | 250 Tm Thulium 69 | 251 Yb Ytterbium 70 | 252 Lu Lutetium 71 | 253 La Lanthanum 57 | 254 Ce Cerium 58 | 255 Pr Praseodymium 59 | 256 Nd Neodymium 60 | 257 Pm Promethium 61 | 258 Sm Samarium 62 | 259 Eu Europium 63 | 260 Gd Gadolinium 64 | 261 Tb Terbium 65 | 262 Dy Dysprosium 66 | 263 Ho Holmium 67 | 264 Er Erbium 68 | 265 Tm Thulium 69 | 266 Yb Ytterbium 70 | 267 Lu Lutetium 71 | 268 La Lanthanum 57 | 269 Ce Cerium 58 | 270 Pr Praseodymium 59 | 271 Nd Neodymium 60 | 272 Pm Promethium 61 | 273 Sm Samarium 62 | 274 Eu Europium 63 | 275 Gd Gadolinium 64 | 276 Tb Terbium 65 | 277 Dy Dysprosium 66 | 278 Ho Holmium 67 | 279 Er Erbium 68 | 280 Tm Thulium 69 | 281 Yb Ytterbium 70 | 282 Lu Lutetium 71 | 283 La Lanthanum 57 | 284 Ce Cerium 58 | 285 Pr Praseodymium 59 | 286 Nd Neodymium 60 | 287 Pm Promethium 61 | 288 Sm Samarium 62 | 289 Eu Europium 63 | 290 Gd Gadolinium 64 | 291 Tb Terbium 65 | 292 Dy Dysprosium 66 | 293 Ho Holmium 67 | 294 Er Erbium 68 | 295 Tm Thulium 69 | 296 Yb Ytterbium 70 | 297 Lu Lutetium 71 | 298 La Lanthanum 57 | 299 Ce Cerium 58 | 300 Pr Praseodymium 59 | 301 Nd Neodymium 60 | 302 Pm Promethium 61 | 303 Sm Samarium 62 | 304 Eu Europium 63 | 305 Gd Gadolinium 64 | 306 Tb Terbium 65 | 307 Dy Dysprosium 66 | 308 Ho Holmium 67 | 309 Er Erbium 68 | 310 Tm Thulium 69 | 311 Yb Ytterbium 70 | 312 Lu Lutetium 71 | 313 La Lanthanum 57 | 314 Ce Cerium 58 | 315 Pr Praseodymium 59 | 316 Nd Neodymium 60 | 317 Pm Promethium 61 | 318 Sm Samarium 62 | 319 Eu Europium 63 | 320 Gd Gadolinium 64 | 321 Tb Terbium 65 | 322 Dy Dysprosium 66 | 323 Ho Holmium 67 | 324 Er Erbium 68 | 325 Tm Thulium 69 | 326 Yb Ytterbium 70 | 327 Lu Lutetium 71 | 328 La Lanthanum 57 | 329 Ce Cerium 58 | 330 Pr Praseodymium 59 | 331 Nd Neodymium 60 | 332 Pm Promethium 61 | 333 Sm Samarium 62 | 334 Eu Europium 63 | 335 Gd Gadolinium 64 | 336 Tb Terbium 65 | 337 Dy Dysprosium 66 | 338 Ho Holmium 67 | 339 Er Erbium 68 | 340 Tm Thulium 69 | 341 Yb Ytterbium 70 | 342 Lu Lutetium 71 | 343 La Lanthanum 57 | 344 Ce Cerium 58 | 345 Pr Praseodymium 59 | 346 Nd Neodymium 60 | 347 Pm Promethium 61 | 348 Sm Samarium 62 | 349 Eu Europium 63 | 350 Gd Gadolinium 64 | 351 Tb Terbium 65 | 352 Dy Dysprosium 66 | 353 Ho Holmium 67 | 354 Er Erbium 68 | 355 Tm Thulium 69 | 356 Yb Ytterbium 70 | 357 Lu Lutetium 71 | 358 La Lanthanum 57 | 359 Ce Cerium 58 | 360 Pr Praseodymium 59 | 361 Nd Neodymium 60 | 362 Pm Promethium 61 | 363 Sm Samarium 62 | 364 Eu Europium 63 | 365 Gd Gadolinium 64 | 366 Tb Terbium 65 | 367 Dy Dysprosium 66 | 368 Ho Holmium 67 | 369 Er Erbium 68 | 370 Tm Thulium 69 | 371 Yb Ytterbium 70 | 372 Lu Lutetium 71 | 373 La Lanthanum 57 | 374 Ce Cerium 58 | 375 Pr Praseodymium 59 | 376 Nd Neodymium 60 | 377 Pm Promethium 61 | 378 Sm Samarium 62 | 379 Eu Europium 63 | 380 Gd Gadolinium 64 | 381 Tb Terbium 65 | 382 Dy Dysprosium 66 | 383 Ho Holmium 67 | 384 Er Erbium 68 | 385 Tm Thulium 69 | 386 Yb Ytterbium 70 | 387 Lu Lutetium 71 | 388 La Lanthanum 57 | 389 Ce Cerium 58 | 390 Pr Praseodymium 59 | 391 Nd Neodymium 60 | 392 Pm Promethium 61 | 393 Sm Samarium 62 | 394 Eu Europium 63 | 395 Gd Gadolinium 64 | 396 Tb Terbium 65 | 397 Dy Dysprosium 66 | 398 Ho Holmium 67 | 399 Er Erbium 68 | 400 Tm Thulium 69 | 401 Yb Ytterbium 70 | 402 Lu Lutetium 71 | 403 La Lanthanum 57 | 404 Ce Cerium 58 | 405 Pr Praseodymium 59 | 406 Nd Neodymium 60 | 407 Pm Promethium 61 | 408 Sm Samarium 62 | 409 Eu Europium 63 | 410 Gd Gadolinium 64 | 411 Tb Terbium 65 | 412 Dy Dysprosium 66 | 413 Ho Holmium 67 | 414 Er Erbium 68 | 415 Tm Thulium 69 | 416 Yb Ytterbium 70 | 417 Lu Lutetium 71 | 418 La Lanthanum 57 | 419 Ce Cerium 58 | 420 Pr Praseodymium 59 | 421 Nd Neodymium 60 | 422 Pm Promethium 61 | 423 Sm Samarium 62 | 424 Eu Europium 63 | 425 Gd Gadolinium 64 | 426 Tb Terbium 65 | 427 Dy Dysprosium 66 | 428 Ho Holmium 67 | 429 Er Erbium 68 | 430 Tm Thulium 69 | 431 Yb Ytterbium 70 | 432 Lu Lutetium 71 | 433 La Lanthanum 57 | 434 Ce Cerium 58 | 435 Pr Praseodymium 59 | 436 Nd Neodymium 60 | 437 Pm Promethium 61 | 438 Sm Samarium 62 | 439 Eu Europium 63 | 440 Gd Gadolinium 64 | 441 Tb Terbium 65 | 442 Dy Dysprosium 66 | 443 Ho Holmium 67 | 444 Er Erbium 68 | 445 Tm Thulium 69 | 446 Yb Ytterbium 70 | 447 Lu Lutetium 71 | 448 La Lanthanum 57 | 449 Ce Cerium 58 | 450 Pr Praseodymium 59 | 451 Nd Neodymium 60 | 452 Pm Promethium 61 | 453 Sm Samarium 62 | 454 Eu Europium 63 | 455 Gd Gadolinium 64 | 456 Tb Terbium 65 | 457 Dy Dysprosium 66 | 458 Ho Holmium 67 | 459 Er Erbium 68 | 460 Tm Thulium 69 | 461 Yb Ytterbium 70 | 462 Lu Lutetium 71 | 463 La Lanthanum 57 | 464 Ce Cerium 58 | 465 Pr Praseodymium 59 | 466 Nd Neodymium 60 | 467 Pm Promethium 61 | 468 Sm Samarium 62 | 469 Eu Europium 63 | 470 Gd Gadolinium 64 | 471 Tb Terbium 65 | 472 Dy Dysprosium 66 | 473 Ho Hol |